

From Adam to Us

Map Book

Nate McCurdy and Bethany Poore



From Adam to Us Map Book

Nate McCurdy and Bethany Poore

ISBN 978-1-60999-087-9

Copyright © 2016 Notgrass Company. All rights reserved.

Cover Photo Credit: Sign post in Scotland by Cornfield / Shutterstock.com

No part of this material may be reproduced without permission from the publisher. You may not photocopy this book. If you need additional copies for children in your family or for students in your group or classroom, contact Notgrass Company to order them.

Printed in the United States of America

Notgrass Company
975 Roaring River Rd.
Gainesboro, TN 38562
1-800-211-8793
www.notgrass.com

From Adam to Us Map Book

Many lessons in *From Adam to Us* have a corresponding map in this book. At the end of each lesson with map assignments, you will be instructed to find a certain map in this book and complete the assignments for that lesson.

You should use colored pencils to complete each assignment. Regular crayons will be too thick. During the course, you will need each of these colors:

red, orange, yellow, green, blue, purple, pink, black, gray, and brown
We highly recommend a quality colored pencil brand like Prismacolor®.

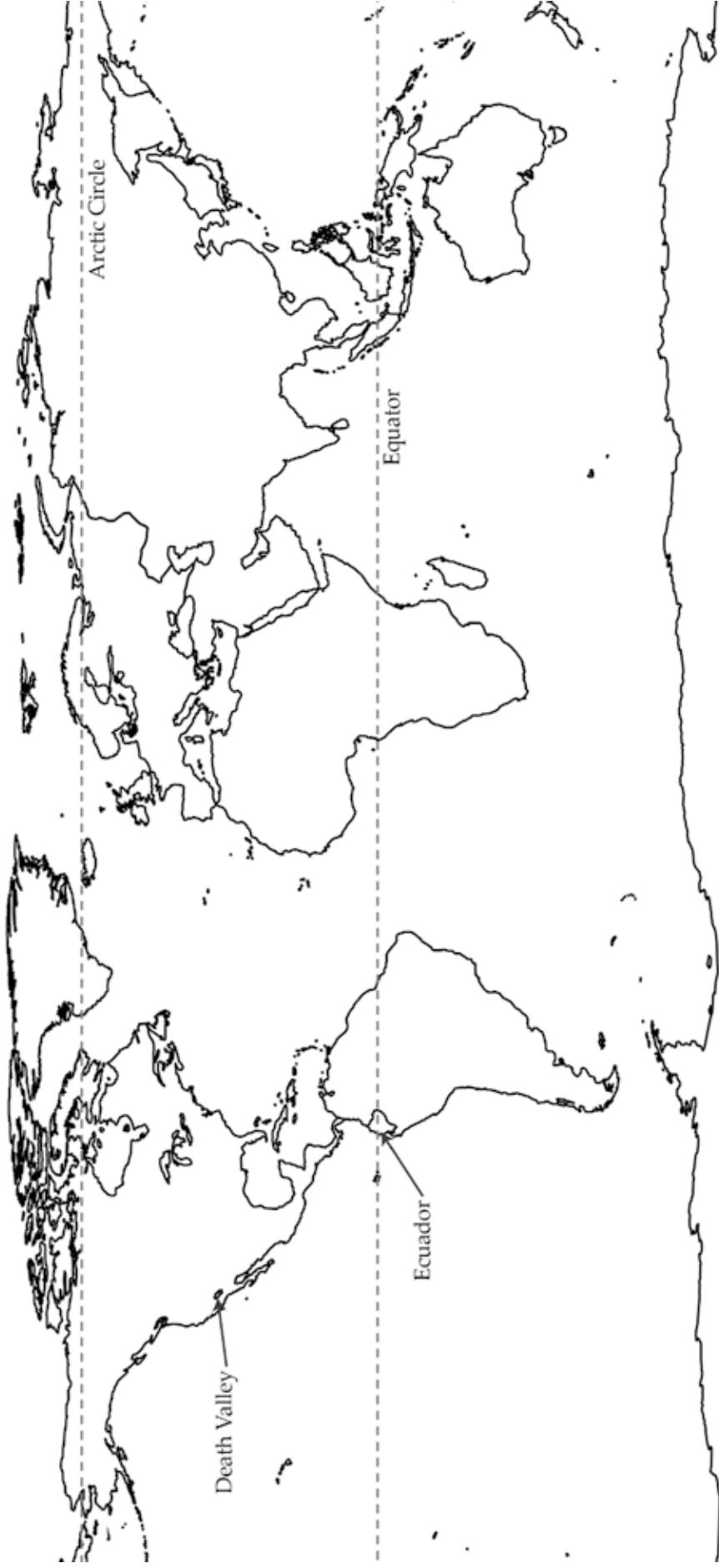
When you are coloring in a shape, color neatly and completely; solidly but not too hard. When you circle one or more words, make your circles (or ovals) neat and complete. When you are instructed to trace along a line, trace just beside the line so that the color will be visible. Do your best and neatest work so that you will be pleased with your collection of maps!

Map 1 - The World

Lesson 5

1. God created seven major masses of land on the earth called continents. Color Africa purple. Color Asia green. Color Australia blue. Color Europe yellow. Color North America red. Color South America orange. (Leave Antarctica white.) With a black pencil, label all seven continents. See the map on page 36 of *From Adam to Us Part 1* to identify the continents.
2. The Arctic region is at the top of the world and includes the North Pole. Trace the dotted line of the Arctic Circle in blue.
3. The equator is an imaginary line that circles the center of the earth. Trace the dotted line of the equator in green.
4. The region around the equator contains numberless varieties of life, such as in the country of Ecuador. Circle the word "Ecuador" with yellow.
5. Death Valley is one of the hottest, driest, and lowest places on earth. Circle the words "Death Valley" with brown.

Map 1 - The World



Map 2 - Nile River

Lesson 7

1. The Nile River flows from south to north. On the left side of the map, draw a purple arrow showing the direction that the Nile flows.
2. The Nile River's three main tributaries are the White Nile, Blue Nile, and Atbara Rivers. Trace along these tributaries with gray.
3. Lake Victoria is Africa's largest lake. Color Lake Victoria blue.
4. Lake Albert is part of the White Nile. Color Lake Albert blue.
5. Murchison Falls is 400 feet tall and is on the White Nile. Circle the words Murchison Falls with pink.
6. The Blue Nile flows out of Lake Tana. Color Lake Tana blue.
7. Tis Issat Falls is on the Blue Nile. Circle the words Tis Issat Falls with yellow.
8. Trace along the Nile River with blue.
9. The Nile divides into smaller rivers to form the triangular, fertile Nile Delta region. Color the Nile Delta region green.
10. The Nile flows into the Mediterranean Sea. Color the Mediterranean Sea blue.

Map 2 - Nile River

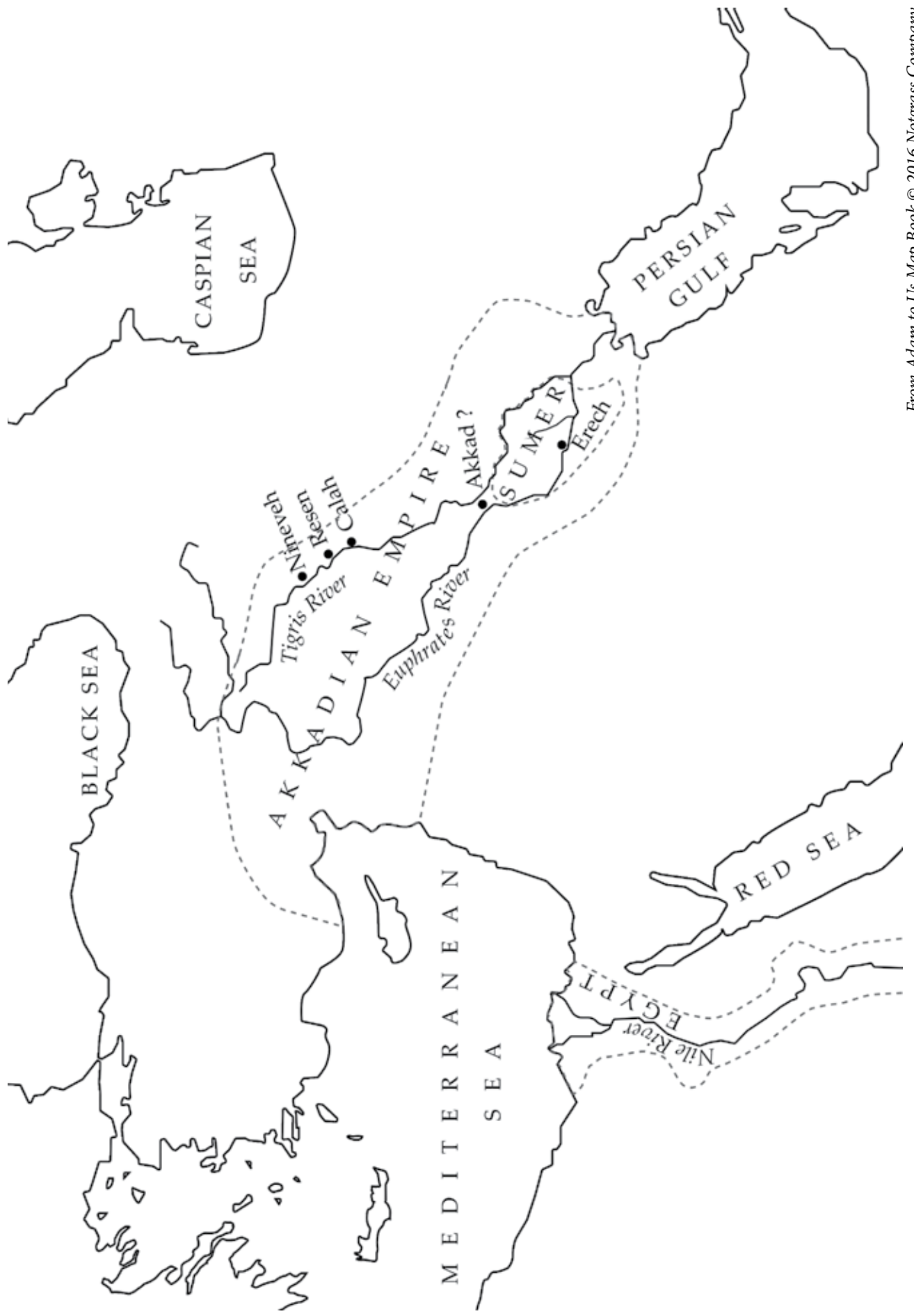


Map 3 - Ancient Civilizations in Egypt and Mesopotamia

Lesson 9

1. The cities built by Nimrod were all along or near the Tigris and Euphrates Rivers. Trace along the Tigris and Euphrates with blue.
2. The locations of five of the eight cities built by Nimrod are known today: Nineveh, Resen, Calah, Akkad (probable), and Erech. Underline the names of these cities in brown.
3. The ancient Egyptian empire flourished along the Nile River. Color Egypt orange.
4. Sargon, perhaps the first ruler of an empire, ruled over the large Akkadian Empire. Color the area of the Akkadian Empire green.
5. The Sumerians regained control of their land from the Akkadians around 2125 BC. Color Sumer pink.

Map 3 - Ancient Civilizations in Egypt and Mesopotamia

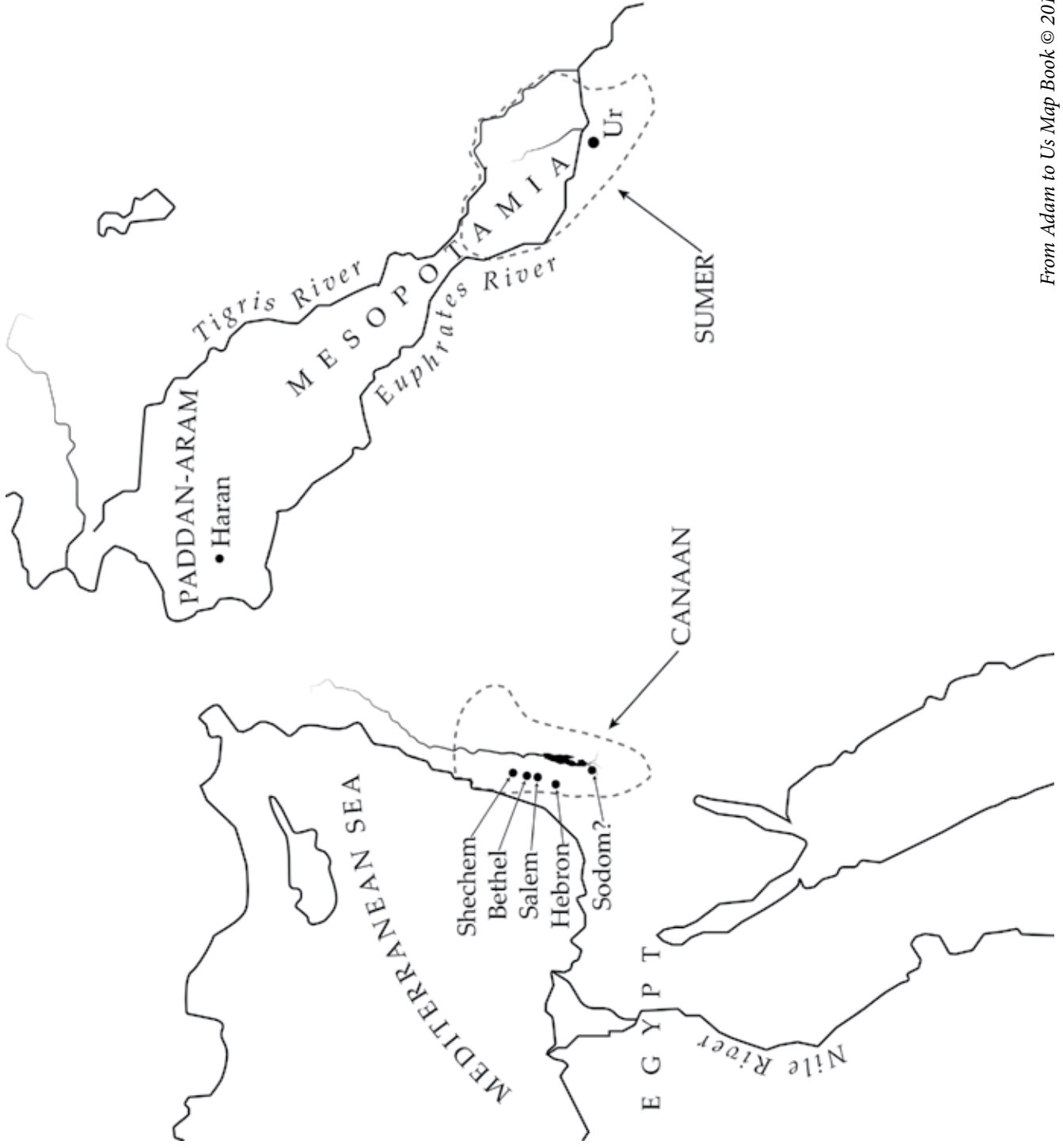


Map 4 - The Lands of Abraham, Isaac, and Jacob

Lesson 11

1. Terah lived in the city of Ur. Underline the word "Ur" with brown.
2. Ur was in the land of Sumer. Color the region of Sumer purple.
3. In Paddan-aram, Abraham lived in the city of Haran. Underline the word "Haran" with red.
4. God promised to give Abraham the land of Canaan. Color the region of Canaan green.
5. Abraham built an altar at Shechem. Underline the word "Shechem" with gray.
6. Abraham pitched his tent at Bethel in Canaan. Underline the word "Bethel" with yellow.
7. To escape a famine in Canaan, Abraham traveled to Egypt. Circle the word "Egypt" with blue.
8. When Abraham and Lot separated, Lot chose to live in Sodom. Underline the word "Sodom" with orange (possible location).
9. Abraham pitched his tent in Hebron. Underline the word "Hebron" with pink.
10. Melchizedek was king of Salem and priest of God Most High. Underline the word "Salem" with purple.
11. Isaac and Jacob both married relatives who were living in Paddan-aram. Circle the word "Paddan-aram" with black.
12. Joseph went to Egypt as a slave. Jacob and his entire family later moved to Egypt. Draw an arrow from the land of Canaan to Egypt with brown.

Map 4 - The Lands of Abraham, Isaac, and Jacob



Map 5 - Crete and the Eastern Mediterranean

Lesson 15

1. The island of Crete is the largest of the islands of Greece. Color the island of Crete and its expanded view yellow.
2. Crete lies about 100 miles south of Greece. Circle the word "Greece" with black.
3. Crete is the fifth largest island in the Mediterranean Sea. Outline the Mediterranean Sea with blue.
4. Archaeologists have studied the Minoan cities of Phaistos, Malia, and Zakros. Underline the names of these cities with brown.
5. Minoans traded with residents of Egypt, Asia Minor, and Syria. Draw arrows from Crete to these locations with green.
6. The largest city of the Minoan civilization was Knossos. Circle the word "Knossos" with purple.

Map 5 - Crete and the Eastern Mediterranean

